

**Mayoor School, Ajmer**  
**EVS /Class III /Annual Examamination /Monday, 16th March 2009**  
**Time Allowed – 2 hour**

MJK -150  
M.M - 100

NAME \_\_\_\_\_ ROLL NO. \_\_\_\_\_

III A-MJK  
III B-SRS  
III C-SRS  
III D-MJK

Q 1. Fill in the blanks: (5)

1. \_\_\_\_\_ tree lives for hundreds of years.
2. The \_\_\_\_\_ keeps its tongue folded at the back of its head.
3. We should sleep for \_\_\_\_\_ hours in a day.
4. \_\_\_\_\_ lives in holes in tree-trunks.
5. \_\_\_\_\_ plant has white flowers.
6. The King Cobra makes a nest of leaves and \_\_\_\_\_ .
7. \_\_\_\_\_ and \_\_\_\_\_ never get any flowers.
8. \_\_\_\_\_ and \_\_\_\_\_ is so light that we do not know how to weigh them.

Q 2. Match the column by putting numbers in the given box. (5)

- |               |                |                      |
|---------------|----------------|----------------------|
| 1. Earthworm  | hundred legs   | <input type="text"/> |
| 2. Walls      | sucks blood    | <input type="text"/> |
| 3. Window     | no legs        | <input type="text"/> |
| 4. Flea       | bricks         | <input type="text"/> |
| 5. Centipede  | glass          | <input type="text"/> |
| 6. Frog       | neem tree      | <input type="text"/> |
| 7. Fish       | pulls the cart | <input type="text"/> |
| 8. Cactus     | jumps          | <input type="text"/> |
| 9. Rough bark | lives in water | <input type="text"/> |
| 10. Bullock   | thorn          | <input type="text"/> |

Q 3. Circle the odd one out and give reasons. (6)

1. Toffees, chocolates, toothpaste, sweets.

---

---

2. Tulsi, rose, lily, ashoka.

---

---

3. Soap, mud, water, towel.

---

---

4. Rat, bat, parrot, cokroach

---

---

Q 4. Arrange the following (8)

(a) From smallest to largest - horse, mosquito, dog, frog

---

(b) From hottest to coldest - cold drink, tap water, fire, ice

---

(c) From heaviest to lightest - note book, teachers's chair, blackboard, pencil

---

(d) From shortest to longest - a month, a minute, a week, a year

---

Q 5. Why should we keep our nails short and clean? Give two reasons (2)

---

---

Q 6. What would happen if there were no plant? (3)

---

---

---

Q 7. What do butterflies do when they sit on the flowers? (1)

---

---

Q 8. Write four things which are good for your body. (2.)

---

---

Q 9. See the two houses and answer the following questions. (2)



A



B

a) What type of roof you will built where there is lots of rainfall A or B .Why?

---

b) Write any two materials used for making roofs.

---

Q. 10. Which parts of your house are useful for these things? (Write two each) (5)

- (a) Keep the rain out \_\_\_\_\_
- (b) Make the house beautiful \_\_\_\_\_
- (c) Let in sunlight and breeze \_\_\_\_\_
- (d) Let us come in and go out \_\_\_\_\_
- (e) Don't let the thieves come in \_\_\_\_\_

Q 11. Give two similarities and two differences between: (12)

(a) An earthworm and a caterpillar.

Similarities

1. \_\_\_\_\_

2. \_\_\_\_\_

Differences

1. \_\_\_\_\_

2. \_\_\_\_\_

(b) Comb and toothbrush

Similarities

1. \_\_\_\_\_

2. \_\_\_\_\_

Differences

1. \_\_\_\_\_

2. \_\_\_\_\_

(c) Mango and Papaya fruits

Similarities

1. \_\_\_\_\_

2. \_\_\_\_\_

Differences

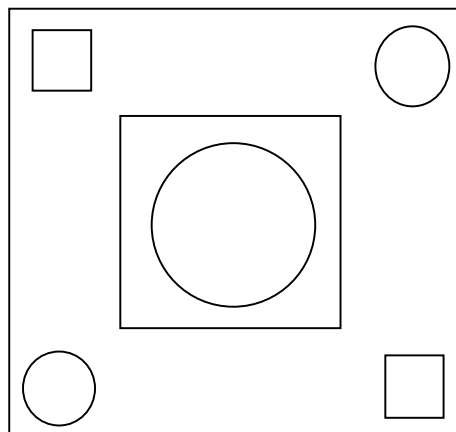
1. \_\_\_\_\_

2. \_\_\_\_\_

Q 12. Name any two kinds of road and two materials they are made of. (3)

<u>Road</u>	<u>Materials</u>

Q 13. How many circles and squares are there in this picture? (2)



\_\_\_\_\_ Squares

\_\_\_\_\_ Circles


Q14.a) Name the animals these houses belongs to- (5)



\_\_\_\_\_



\_\_\_\_\_



b) From the above picture write names of those animals which make their own house.


\_\_\_\_\_

c) Write any two materials used for making these houses. \_\_\_\_\_

d) The materials which you have written in answer c are natural or man made?

\_\_\_\_\_

Q15. Given things are used for measurements. Write what they are used to measure. (3)



\_\_\_\_\_

\_\_\_\_\_

\_\_\_\_\_

Q16. Observe the given animal and write five sentences to describe it. (5)



---

---

---

---

---


Q17. Name three of them. (9)

- 1. Things heavier than me. \_\_\_\_\_
- 2. Things that you need to take a bath. \_\_\_\_\_
- 3. Animals which are active in the night. \_\_\_\_\_
- 4. Plants which give us lot of shade. \_\_\_\_\_
- 5. Home of three animals inside your house. \_\_\_\_\_
- 6. Parts of the body where the skin is folded \_\_\_\_\_

Q18.a) Tick mark the building materials which are found naturally. (5)




Grass



Glass



stone



Iron rods



Bamboo



cement



Brick



wood

b) Write any two materials which feels very hot after you keep them out in the sun.

---

c) Write any two materials you will use to make a kutcha house (hut).

---

d) Write any two building materials used for making window in a house.

---

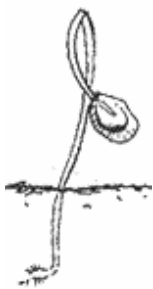
Q19. Fill the correct body parts.

(4)

- a) My neck joins my \_\_\_\_\_ to my \_\_\_\_\_
- b) My \_\_\_\_\_ joins my thigh to my \_\_\_\_\_
- c) My \_\_\_\_\_ joins my \_\_\_\_\_ to my upper arm.
- d) My ankle joins my \_\_\_\_\_ to my \_\_\_\_\_

Q20. See the growing seed and write no.(1,2,3,4) as the events happen.

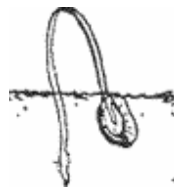
(1)



---



---



---



---

Q 21. Name, draw and colour

(12)

(a) An eight legged animal

(b) A thing to keep your hair clean

--	--

(c) Any one type of house

(d) A thing that lets you know the time

--	--

(e) Any plant near your home

(f) A thing used to cut your nails

--	--