

MAYOOR SCHOOL, AJMER
GK/ IV/Annual Examination/Saturday/ March 7, 2009
(Time Allowed- 1 Hour)

SRS-145
MM-50

IV-A-NMS
IV-B-DSG
IV-C-NLG
IV-D-SRS

NAME _____ CLASS _____ SECTION _____

GENERAL INSTRUCTIONS

1. The question paper contains 12 questions and 6 printed pages.
2. All questions are compulsory.

Q1. Answer the following questions in brief :- (10)

a) What do you know about the great Himalayas? Name the three parallel ranges of Himalayas.

b) Why are the northern plains considered a very productive part of India? Also name the three major rivers that flow through it.

c) Write few lines on the Indian Desert?

d) What are the two main divisions of the peninsular plateau?

e) Name and write about the two groups of islands of our country?

Q2. Match the dances of India with the place they belong to :- (7)

- | | |
|-----------------|----------------------|
| a) Bharatnatyam | Gujrat _____ |
| b) Mohiniattam | Kerala _____ |
| c) Odissi | Assam _____ |
| d) Kuchipudi | Tamil Nadu _____ |
| e) Garba | Orissa _____ |
| f) Bihu | Kashmir _____ |
| g) Rouff | Andhra Pradesh _____ |

Q3. Look at the picture and identify the personality. Also mention the field they excel in :-

a) (6)



d)



Name _____

Name _____

Field _____

Field _____

b)



Name _____

Field _____

e)



Name _____

Field _____

c)



Name _____

Field _____

f)



Name _____

Field _____

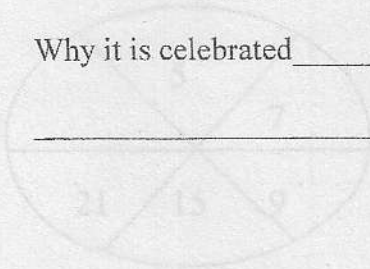
Q4. Name the festival celebrated by Sikhs and Northern India and the reason why it is celebrated? (2)

Q5. Given below are some of the festivals celebrated in India. For each of them mention who celebrates it and why is it celebrated :- (6)

a) Pongal

Celebrated by _____

Why it is celebrated _____



b) Id-Ul-Fitr

Celebrated by _____

Why it is celebrated _____

c) Ganesh Chaturthi

Celebrated by _____

Why it is celebrated _____

Q6. Write the capital of the following states :-

(7)

a) Haryana _____

b) Maharashtra _____

c) Assam _____

d) Karnataka _____

e) Kerala _____

f) West Bengal _____

g) Bihar _____

Q7. On the physical map of India given, Mark the following features

(5)

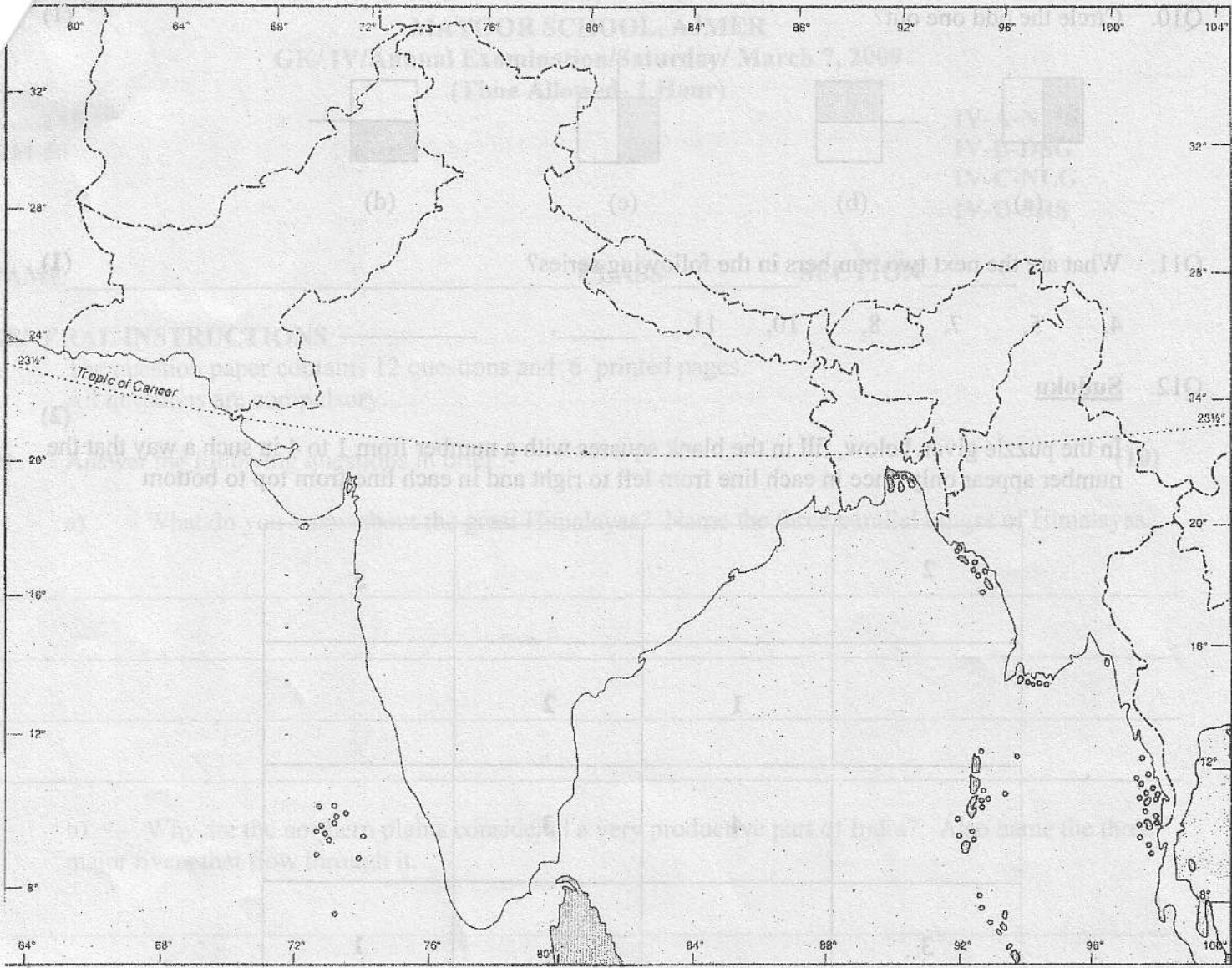
a) Deccan Plateau

b) Western Ghats

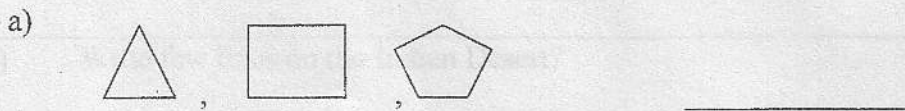
c) The Northern Plains

d) Great Indian Desert

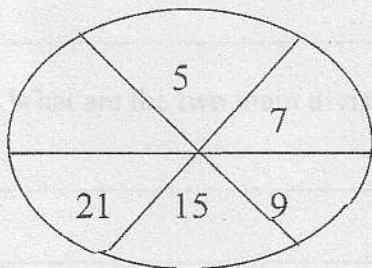
a) Great Himalayas



Q8. Complete the given series. (2)



Q9. Fill in the missing numbers. (1)



Q10. Circle the odd one out?

(1)




(a)



(b)



(c)



(d)

Q11. What are the next two numbers in the following series?

(1)

4, 5, 7, 8, 10, 11, _____, _____

Q12. **Sudoku**

(2)

In the puzzle given below, fill in the blank squares with a number from 1 to 4 in such a way that the number appear only once in each line from left to right and in each line from top to bottom

2			4
	1	2	
	4	3	
3			1

