

MAYOOR SCHOOL AJMER

General Knowledge/Class VI/Annual Examination/Saturday/March 7th, 2009

(Time allowed: 1 hour)

VA-SRS
VB-NGC
VC, D-TNB

TNB-145

MM-50

NAME _____

ROLL No. _____

General instructions: (1) This paper contains 15 questions and 4 printed pages.

(2) All questions are compulsory.

Q1. Fill in the blanks:-

(5)





- i. _____ is the highest mountain of the world Placed in the Himadri.
- ii. The Great Indian desert is called _____ desert.
- iii. Lakshadweep islands are _____ islands.
- iv. The Andaman and Nicobar islands lie in the _____
- v. The Ashoka Chakra has _____ spokes and signifies _____
- vi. The National Anthem was written by _____
- vii. The ratio of length is to breadth in our national flag is _____
- viii. A set of seven athletic events for women is called _____
- ix. Chess originated in _____

Q 2. Give the capitals of the following and also say if they are a state or a union territory:- **(4)**

<u>PLACE</u>	<u>CAPITAL</u>	<u>STATE / UNION TERRITORY</u>
i. Manipur		
ii. Chhatisgarh		
iii. Lakshadweep		
iv. Uttaranchal		

Q 3. Recognize the following and give their location:-

(4)



NAME

LOCATION





Q 4. Name any one trophy given for the following games:- (2)

- i. Badminton _____ ii. Cricket _____
 iii. Hockey _____ iv. Golf _____

Q 5. Name any one personality associated with the following:- (3)

- i. Carnatic Vocal Music _____ ii. Flute _____
 iii. Hindustani Classical Music _____ iv. Tabla _____
 v. Kathak Dance _____ vi. Mohiniattam _____


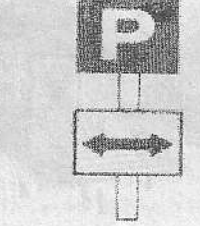



Q 6. Recognize the following and also name the field that they are famous for:- (4)

Q 7. Give the current affair related with the following in brief:- (4)

- i. Pt. Bhimsen Joshi _____
 ii. Slumdog Millionaire _____
 iii. Hotel Taj _____
 iv. Chief Minister of Rajasthan _____

Q 8. Name the following symbols and classify them as Precautionary or Informatory symbols:- (5)

				
NAME				
PRECAUTIONARY OR INFORMATORY				

Q 9. What is written at the base of the wheel in National Emblem and what does it mean? (2)

Q 10. On which dates are the following days celebrated:- (3)

i. United Nations day-- _____

ii. Martyr's day-- _____

iii. Flag day-- _____

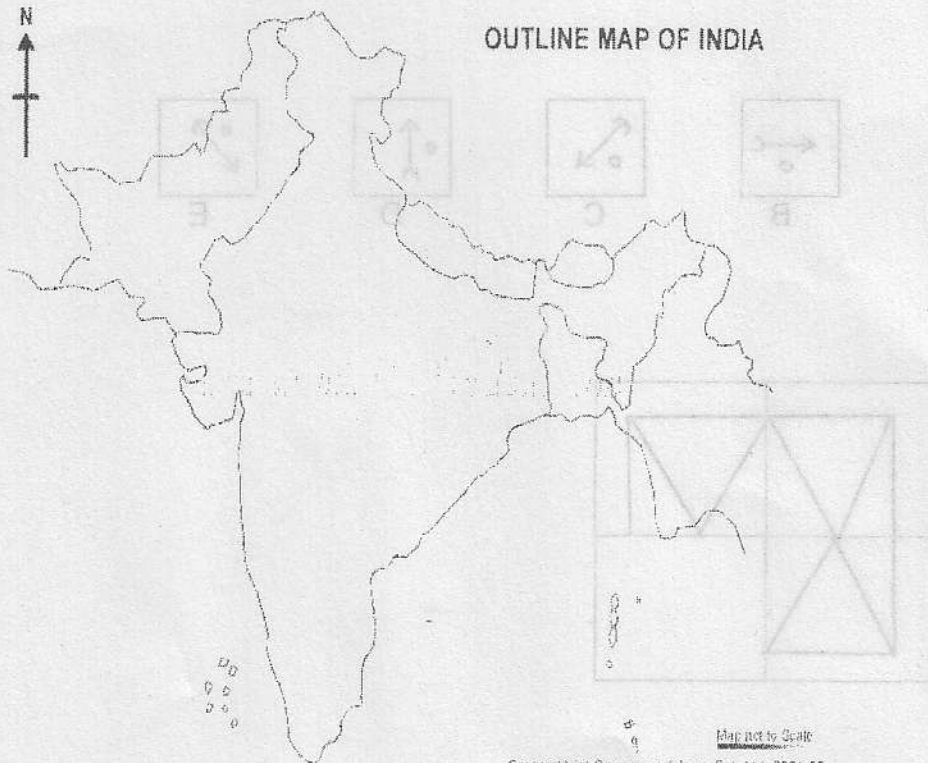
iv. May day-- _____

v. World Health day-- _____

vi. Indian Republic day-- _____

Q 11. Mark the following on the given map of India:- (6)

- i. Coastal Plains
- ii. Andaman and Nicobar islands
- iii. Sikkim
- iv. The Great Indian desert
- v. Daman and Diu
- vi. Jammu and Kashmir



Map not to Scale
Copyright © Computer Infobase Pvt. Ltd. 2001-02

Q 12. Complete the following square by filling in the missing number:-

(2)

25	49	81
5	7	
50	70	90
20		36

Q 13. Arrange the following words according to the dictionary:-

(1)

Grasp, Granite, Graph, Grape.

Q 14. Find the number that comes next in the given sequence:-

(1)

6, 18, 3, 21, 7, 56, _____.

Q 15. Complete the following sequence by drawing the figure in the blank:-

(4)

